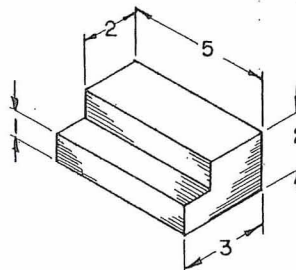
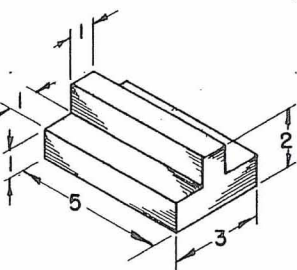
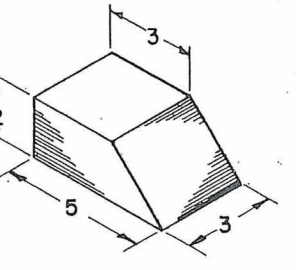
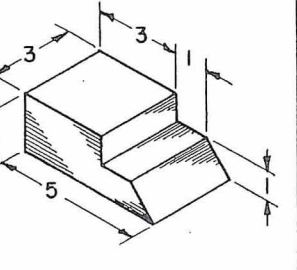
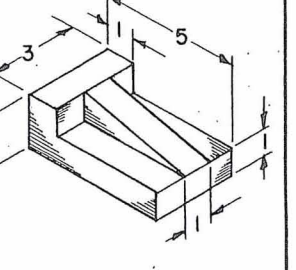
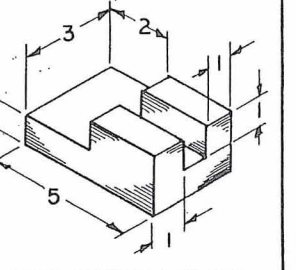
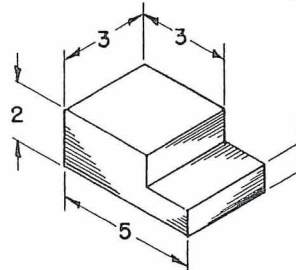
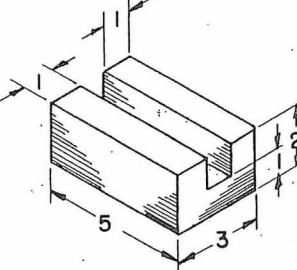
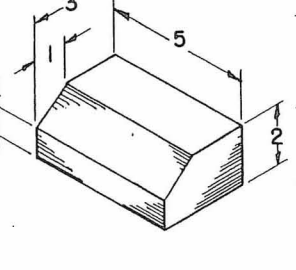
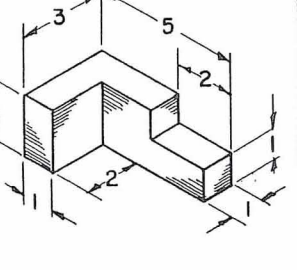
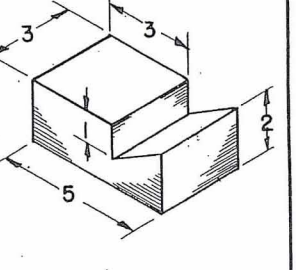
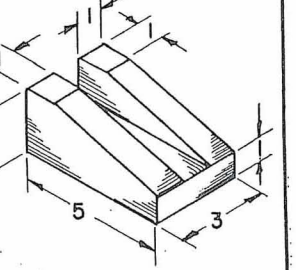
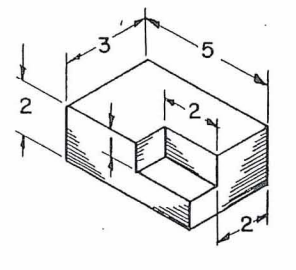
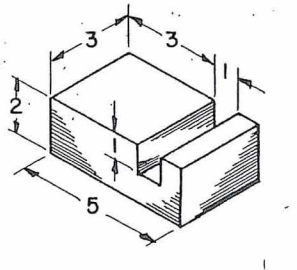
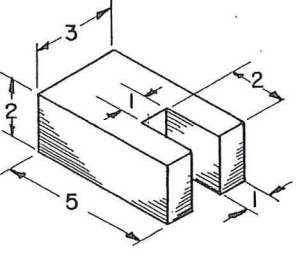
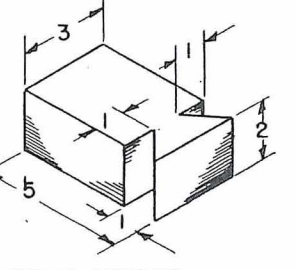
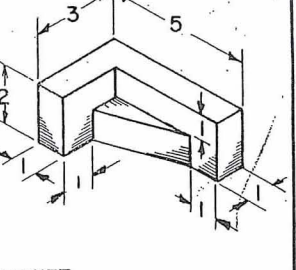
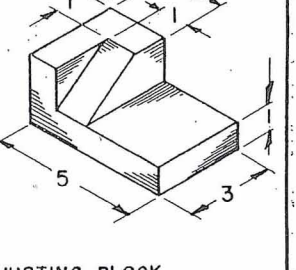
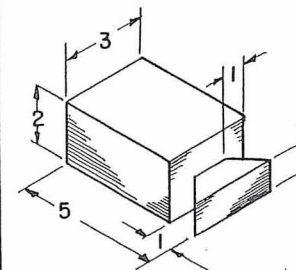
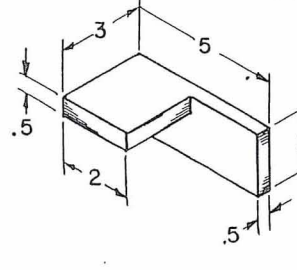


PROBLEM SHEET NO. 1

DIRECTIONS— MAKE A MECHANICAL DRAWING OF EACH OBJECT PICTURED. USE ONE SHEET OF ORTHOGRAPHIC PROJECTION PAPER FOR EACH DRAWING. PLACE TOP, FRONT AND RIGHT END VIEWS IN THE AREAS INDICATED. START TOP AND FRONT VIEWS AT THE INTERSECTION OF THE HORIZONTAL AND VERTICAL O" PROJECTION LINES. AFTER EACH DRAWING IS FINISHED, REMOVE CORNER OF PAPER, FOLD INTO BOX AND EXAMINE. CORRECT IF NECESSARY.

COPYRIGHT 1956,—CHARLES QUINLAN. PUBLISHED BY CHARLES QUINLAN, 250 ALLYNDALE DR., STRATFORD, CONN.

<p>1</p>  <p>RABBETED BLOCK</p>	<p>4</p>  <p>TONGUED BLOCK</p>	<p>7</p>  <p>BEVELED BLOCK</p>	<p>10</p>  <p>LAP MITER MEMBER</p>	<p>14</p>  <p>ANGLE BLOCK</p>	<p>18</p>  <p>GROOVED SUPPORT BLOCK</p>
<p>2</p>  <p>END LAP MEMBER</p>	<p>5</p>  <p>GROOVED BLOCK</p>	<p>8</p>  <p>CHAMFERED BLOCK</p>	<p>11</p>  <p>ANGLE LAP BLOCK</p>	<p>15</p>  <p>DOVETAIL DADO MEMBER</p>	<p>19</p>  <p>GUIDE BLOCK</p>
<p>3</p>  <p>NOTCHED BLOCK</p>	<p>6</p>  <p>DADO BLOCK</p>	<p>9</p>  <p>OPEN MORTISE MEMBER</p>	<p>12</p>  <p>DOVETAIL MEMBER</p>	<p>16</p>  <p>BRACKET</p>	<p>20</p>  <p>ADJUSTING BLOCK</p>

<p>13</p>  <p>LAP DOVETAIL MEMBER</p>	<p>17</p>  <p>SHELF</p>
--	--